



# **MPVM:GANGA GURUKULAM HOLIDAY HOMEWORK**





# Class - 3

## List of subjects:

- ❖ *English*
- ❖ *Hindi*
- ❖ *Mathematics*
- ❖ *Science*
- ❖ *SST*
- ❖ *Computer*



**MPVM:GANGA GURUKULAM**

.....  
**Gaddopur, Phaphamau, Prayagaraj**

**WEBSITE – [www.mpvmgg.com](http://www.mpvmgg.com)**

# English

1. Complete the nouns in the square using the clues given below:

1	T			
2		T		
3			T	
4				T
5			T	
6		T		
7	T			

1. A monkey has a long \_\_\_\_\_.
2. I saw him at the bus \_\_\_\_\_.
3. What is the \_\_\_\_\_ today?
4. Birds build this \_\_\_\_\_.
5. The boy is flying a \_\_\_\_\_.
6. A \_\_\_\_\_ twinkles in the sky at night.
7. Parrot is sitting on the \_\_\_\_\_.

2. Underline the silent letters-

KNIFE	WALK	JOKE	CHALK
WATCH	HOUR	CALM	HONEST
	KNOCK	LISTEN	

3. Identify these 'doing' words:





---




---




---




---




## PICTURE DESCRIPTION – AT THE PARK



- Take a look at the above picture.
- Write five lines about it on a separate sheet of paper.
- Find out four differences in the picture given below and write sentences on it.

### WRITING PRACTICE: SPEAKING PRACTICE

#### FIND DIFFERENCES: Write sentences











In the first picture, it is a cloudy day but in the second picture, it is a sunny day

- Write and learn all the work done in English Literature and English Language book & notebook. Learn poem "My Big Fat Cat" given on page no.15 in your English Literature book.


# Hindi

- मधुप पुस्तक की 'आया वसंत' नामक कविता याद करो-
- मधुप पुस्तक की पृष्ठ संख्या 21 का (1,2), 23 का शब्द खेल, 30 का (2,3), 36 का (1,2,3) तथा 53 पृष्ठ का (2,3) अभ्यास कार्य पुस्तक में करो-
- 'वृक्ष हमारे मित्र होते हैं' इस विषय पर 8 से 10 पंक्तियों का एक अनुच्छेद लिखो-
- निम्न संज्ञा शब्दों को उचित स्थान पर लिखो-

			
विद्यालय	दादा जी	किताब	दिल्ली
			
खिलौना	गरिमा	घर	मेज़
<b>प्राणी</b> ..... ..... .....		<b>वस्तु</b> ..... ..... .....	
<b>स्थान</b> ..... ..... .....			

- आम में दिए गये सर्वनाम शब्दों की मदद से खाली जगह भरो-

- (क) क्या ..... कल आएँगे?
- (ख) ..... काम खुद करो।
- (ग) कल ..... अपने नाना जी के घर जाऊँगा।
- (घ) ..... क्या नाम है?
- (ङ) ..... मम्मी तुम्हें पढ़ाती हैं।
- (च) ..... साथ बहुत मज़ा आता है।





- निम्न शब्दों के दो-दो पर्यायवाची शब्द लिखो-



प्रथम टोकरी में कुछ लिंग शब्द हैं। इन्हें उपयुक्त टोकरी में लिखिए-



निम्नलिखित शब्दों के वचन बदलकर लिखो-

(क) रास्ता	_____	(च) चिड़ियाँ	_____
(ख) कला	_____	(छ) जातियाँ	_____
(ग) रात	_____	(ज) बहनें	_____
(घ) नदी	_____	(झ) नदियाँ	_____
(ङ) लिपि	_____	(ञ) कथाएँ	_____

# Maths

Q1. Solve L-1 in your Maths book itself. Also revise all the work done in Maths book and notebook.

1.  $\begin{array}{c} \square \\ \swarrow \quad \searrow \\ 4 \quad + \quad 7 \end{array}$

2.  $\begin{array}{c} 17 \\ \swarrow \quad \searrow \\ 3 \quad - \quad \square \end{array}$

3.  $\begin{array}{c} \square \\ \swarrow \quad \searrow \\ 12 \quad + \quad 5 \end{array}$

4.  $\begin{array}{c} 20 \\ \swarrow \quad \searrow \\ \square \quad - \quad 6 \end{array}$

5.  $\begin{array}{c} \square \\ \swarrow \quad \searrow \\ 15 \quad + \quad 3 \end{array}$

6.  $\begin{array}{c} 17 \\ \swarrow \quad \searrow \\ 7 \quad - \quad \square \end{array}$

Q2. Solve the following :

Q3. Solve the following questions and fill colour according to the answers given below :

7 - 3 =

+ 2 =

+ 5 =

- 4 =

+ 1 =

6 +  =

- 2 =

+ 4 =

2 +  =

- 5 =

+ 3 =

3 +  = 5

+ 4 =

- 3 =

+ 4 =

Q4. Solve each of the questions to complete the following riddle:

Write the price of your school uniform and school bag, then find its face value and place value of each number and write it in expanded form.

Price	Place value	Face value	Expanded form

Q5.

Write the greatest and smallest 4 digit number by using the given digits.

Digits number	Greatest number	Smallest
1. 7, 1, 6, 5		
2. 5, 3, 0, 9		

Q6.

Visit the vehicle parking area. Note down the numbers of any 10 vehicles.

\_\_\_\_\_

\_\_\_\_\_

\_\_\_\_\_

\_\_\_\_\_

\_\_\_\_\_

\_\_\_\_\_

\_\_\_\_\_

\_\_\_\_\_

\_\_\_\_\_

\_\_\_\_\_

Arrange these numbers in ascending and descending orders.

\_\_\_\_\_

\_\_\_\_\_






\_\_\_\_\_

\_\_\_\_\_

\_\_\_\_\_

Scanned with CamScanner

Q7.

- (a) .  --- \_\_\_\_\_
- (b) .  --- \_\_\_\_\_
- (c) .  --- \_\_\_\_\_
- (d) .  --- \_\_\_\_\_
- (e) .  --- \_\_\_\_\_

Q8. Look at the following shapes and draw any two objects of each shape that you see around you. Also mention it's name.



# EVS

## S.St.

**Ques. 1. Answer the following questions.**

- What is the capital city of India ? \_\_\_\_\_
- Which is the national song of India? \_\_\_\_\_.
- What is India's National Symbol? \_\_\_\_\_
- What are some of India's popular sports ? \_\_\_\_\_
- What are the official languages of India ? \_\_\_\_\_, \_\_\_\_\_.

**Ques.2. Identify and name these dance forms.**



**Ques.3. Look at the map and unscramble the following names of the continents:**



- ☐ AASI \_\_\_\_\_
- ☐ RIAFAC \_\_\_\_\_
- ☐ ICARTACTAN \_\_\_\_\_
- ☐ TRONH REICAMA \_\_\_\_\_
- ☐ REOPEU \_\_\_\_\_
- ☐ SHOUT CERIAAM \_\_\_\_\_
- ☐ STAIURALA \_\_\_\_\_

**Ques. 4. Find out and write the following details (capitals, language, one famous food item, one famous festival) about the following states-**

- Maharashtra
- Punjab
- Gujarat
- Uttar Pradesh
- Assam

**Ques 5. Write down the capitals of the given states.**

Andhra Pradesh _____	Maharashtra _____
Arunachal Pradesh _____	Manipur _____
Assam _____	Meghalaya _____
Bihar _____	Mizoram _____
Chhattisgarh _____	Nagaland _____
Goa _____	Odisha _____

**Ques 6. Make a National Flag by using coloured papers.**


**Ques 7 .Write and learn the exercise of chapter – 1 The Beginning of Time. Learn the definitions and hard words properly.**

# Science

**1. Learn and Practice the Definitions, Exercises, Question/Answers, Give Reasons and the Diagrams which you have done in your book and notebook.**

**2. Make any 2 types of houses with waste materials and paste them on a separate sheet of paper. Also write their names.**

**3. Identify the parts of a plant and their functions.**



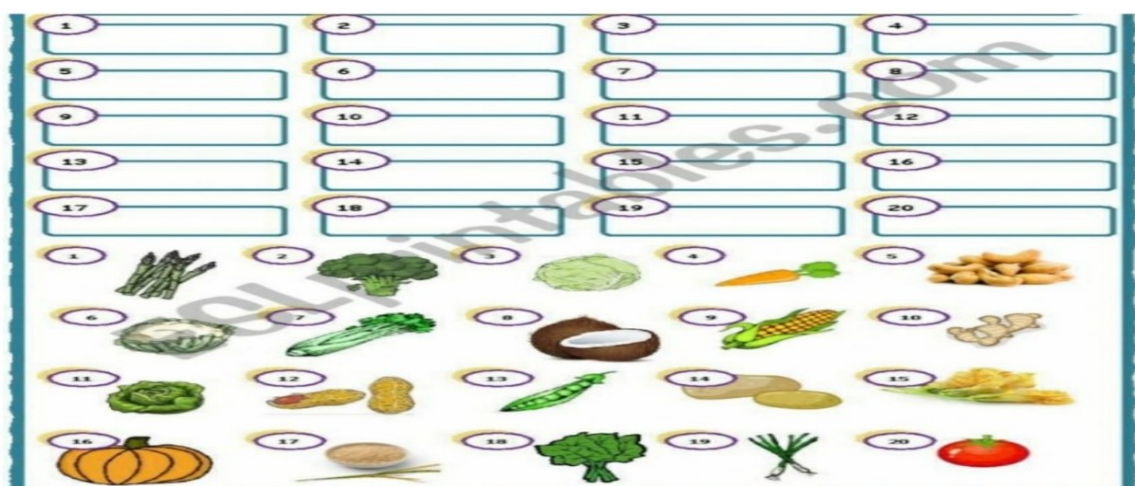
Parts:	Flower	Fruit	Stem	Leaf	Root
Functions:	Helps in reproduction	Protects the seeds	Supports the plant	Performs photosynthesis	Absorbs water & minerals

**4. Write the difference between living and non living things in the given space and draw picture of one living and one non-living thing.**

Living things	Non- living things
>	<
>	<
>	<
>	<
>	<
>	<

**5. Which part of the plants can we eat?**

**Write flowers, leaves, stem, fruit, root or seeds.**





# Computer

A. Fill in the blanks with the words given in the box below:-

Distance

Clean

Search

Wire

Move

- Do not pull any \_\_\_\_\_ connected to the computer.
- Keep the computer and its surrounding area \_\_\_\_\_ from dust.
- Keep your eyes at least at an arm's \_\_\_\_\_ from the monitor.
- \_\_\_\_\_ your eyes and neck, after every 30-40 minutes of using the computer.
- \_\_\_\_\_ your hands and fingers if you are using the keyboard or mouse for long time.

B. Choose the correct option:-

- Starting of a computer is known as ( **Shutting** / **Booting** ).
- The first screen appears when computer starts is called ( **Desktop** / **Background** ).
- Icons represent different ( **Functions** / **Programs** ).
- In Trash ( **Saved** / **Deleted** ) file goes.
- ( **Menu** / **Title bar** ) displays the name of the document.
- ( **Calculator** / **Notepad** ) is used to do calculations.


C. Explain what does the word I P O means. Draw an IPO cycle for computers.

---

---

---

Write I for input, P for process, O for output below the picture:







# HAPPY SUMMER

HOLIDAYS